




GROUPING FUN!

Below are three butterfly and flower groupings—also known as ten frames. Use them to practice counting by answering the questions for each one.



1. How many butterflies are in this grouping? _____
2. How many flowers are in this grouping? _____
3. How many total flowers and butterflies are there? _____

4. How many butterflies are in this grouping? _____
5. How many flowers are in this grouping? _____
6. How many total flowers and butterflies are there? _____



7. How many butterflies are in this grouping? _____
8. How many flowers are in this grouping? _____
9. How many total flowers and butterflies are there? _____



Look for more learning activities in the back of the book!



There's more than one way to fly . . .
and more than one way to make ten!

Complete the following math problems.
Then color in the picture on the bottom of the page!

A. $1 + \underline{\quad} = 10$


B. $\underline{\quad} + 8 = 10$

C. $7 + \underline{\quad} = 10$



D. $\underline{\quad} + 6 = 10$

E. $5 + 5 = \underline{\quad}$



Look for more learning
activities in the back
of the book!

